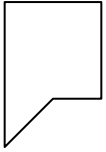




Determine which letter BEST represents the shapes that were used to create the figure shown.

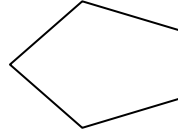
**Answers**

1)



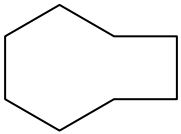
- A. rectangle & triangle
- B. pentagon & octagon
- C. triangle & heptagon
- D. square & heptagon

2)



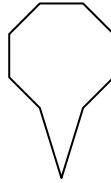
- A. hexagon & octagon
- B. pentagon & heptagon
- C. quadrilateral & triangle
- D. octagon & quadrilateral

3)



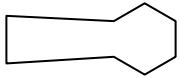
- A. octagon & heptagon
- B. pentagon & triangle
- C. hexagon & square
- D. triangle & rectangle

4)



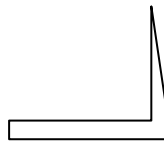
- A. square & hexagon
- B. triangle & heptagon
- C. triangle & octagon
- D. hexagon & octagon

5)



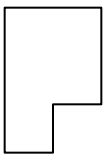
- A. heptagon & hexagon
- B. pentagon & square
- C. rectangle & heptagon
- D. quadrilateral & hexagon

6)



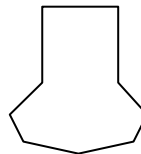
- A. quadrilateral & triangle
- B. heptagon & octagon
- C. quadrilateral & rectangle
- D. hexagon & rectangle

7)



- A. octagon & square
- B. square & quadrilateral
- C. hexagon & triangle
- D. hexagon & heptagon

8)



- A. hexagon & heptagon
- B. square & heptagon
- C. hexagon & pentagon
- D. triangle & octagon

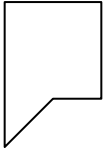
- 1. \_\_\_\_\_
- 2. \_\_\_\_\_
- 3. \_\_\_\_\_
- 4. \_\_\_\_\_
- 5. \_\_\_\_\_
- 6. \_\_\_\_\_
- 7. \_\_\_\_\_
- 8. \_\_\_\_\_



Determine which letter **BEST** represents the shapes that were used to create the figure shown.

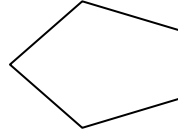
**Answers**

1)



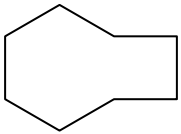
- A. rectangle & triangle
- B. pentagon & octagon
- C. triangle & heptagon
- D. square & heptagon

2)



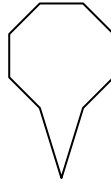
- A. hexagon & octagon
- B. pentagon & heptagon
- C. quadrilateral & triangle
- D. octagon & quadrilateral

3)



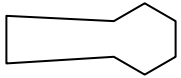
- A. octagon & heptagon
- B. pentagon & triangle
- C. hexagon & square
- D. triangle & rectangle

4)



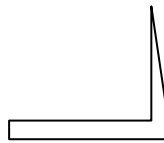
- A. square & hexagon
- B. triangle & heptagon
- C. triangle & octagon
- D. hexagon & octagon

5)



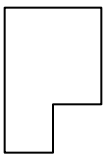
- A. heptagon & hexagon
- B. pentagon & square
- C. rectangle & heptagon
- D. quadrilateral & hexagon

6)



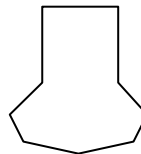
- A. quadrilateral & triangle
- B. heptagon & octagon
- C. quadrilateral & rectangle
- D. hexagon & rectangle

7)



- A. octagon & square
- B. square & quadrilateral
- C. hexagon & triangle
- D. hexagon & heptagon

8)



- A. hexagon & heptagon
- B. square & heptagon
- C. hexagon & pentagon
- D. triangle & octagon

- 1.   **A**
- 2.   **C**
- 3.   **C**
- 4.   **C**
- 5.   **D**
- 6.   **A**
- 7.   **B**
- 8.   **B**